

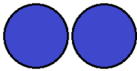





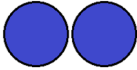
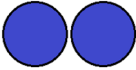
3-⑮	たしざん①		
がつ		にち ()	なまえ


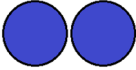
たしざんをしましょう。

			
1	+	1	=

			
2	+	1	=



			
1	+	3	=



			
2	+	2	=



			
3	+	2	=



3-⑩	たしざん②		
がつ にち ()		なまえ	



たしざんをしましょう。

			
3	+	3	=

			
4	+	3	=

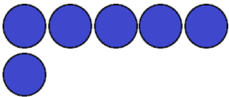

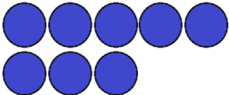

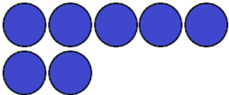

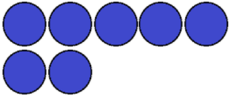

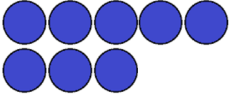

			
5	+	1	=

			
4	+	4	=

			
5	+	5	=

3-⑰	たしざん③	
がつ	にち ()	なまえ

たしざんをしましょう。

 6	+	 2	=
 8	+	 1	=
 7	+	 3	=
 7	+	 2	=
 8	+	 2	=

3-⑱	たしざん④		
がつ	にち	()	なまえ

たしざんをしましょう。

$$2 + 1 =$$

$$1 + 4 =$$

$$2 + 2 =$$

$$2 + 3 =$$

$$3 + 1 =$$

3-⑱	たしざん⑤		
がつ	にち	()	なまえ

たしざんをしましょう。

$$4 + 2 =$$

$$3 + 4 =$$

$$5 + 3 =$$

$$3 + 3 =$$

$$5 + 5 =$$

3-⑳	たしざん⑥		
がつ	にち	()	なまえ

たしざんをしましょう。

$$6 + 3 =$$

$$4 + 4 =$$

$$5 + 2 =$$

$$3 + 5 =$$

$$6 + 4 =$$